



DAV PUBLIC SCHOOL

GOKULPUR, PAKUR, JH

HOLIDAY



Homework

SESSION : 2025 - 26

CLASS: II SECTION -

NAME - _____

ROLL NO.- _____



Class II

SUBJECT : ENGLISH



Write five sentences about your favourite season.

1. _____.

2. _____.

3. _____.

4. _____.

5. _____.

Write the plural form of the given nouns:-

Singular

Plural

Book

Shop

Bush

Dish

Cherry

Fox

Box






Peach

Shelf


fruit word search

1. Write the name of the fruit in the space provided.
2. Find the word in the word search puzzle.
(Words only run across and down.)

s	t	r	a	w	b	e	r	r	y
o	r	a	n	j	e	p	e	a	r
r	m	e	h	o	a	e	w	n	a
a	b	a	b	a	n	a	n	a	p
n	x	p	a	i	r	c	e	y	p
g	r	a	p	e	s	h	k	a	l
e	p	i	n	e	a	p	p	l	e



ACTIVITY



Water is precious! Save every drop.

No water, No life,

No blue, No Green.

To understand the need and importance of water, Create a pictorial depiction on ways to conserve water on A3 Sheet.

Class II

SUBJECT : HINDI

प्रश्न १ - चित्र देख कर तीन - तीन पर्यायवाची शब्द लिखो-













प्रश्न २ मिलान करो- भाषा के रूप

मौखिक भाषा

लिखित भाषा



प्रश्न ३ शब्दों को चित्रों से जोड़ कर मुहावरे बनाओ

घी के



गले का

ईद का



आँखों का



चित्र वर्णन करिए—



रचनातनामक कार्य

एक रंगीन चार्ट पर हिंदी में महीनो और दिनों के नाम लिखे

उसमे अपने घर वालो का जन्मदिन भी लिखे



Class II
SUBJECT : MATHS

Q1. Complete the following questions from the given hints:-

162	328	273	184
680	204	127	95
755	827	951	616

In the table, Can you find?

A number between 100 and 150	
A number between 900 and 1000	
A number smaller than 100	
A number between 300 and 400	
A number that has 6 tens	
A number that has 5 ones	
A number that has 6 hundreds.	
A number that has 2 digits the same.	
A number with no tens	

Q2. Write the smallest and greatest number in each set and Arrange them in Ascending order:-



	Smallest	Greatest	Ascending order
1,3,5,4			
3,0,7,2			
9,8,5,1			
6,7,4,0			
5,9,2,1			
3,6,10,8			

Q3. Fill in the blanks with <, > or =.

a) 116 ____ 142

b) 233 ____ 147

c) 203 ____ 349

d) 382 ____ 209

e) 232 ____ 109







f) 159 ____ 240

g) 304 ____ 110

Q4. Ordinal Numbers. Write the answer and colour them:-

ORDINAL NUMBERS – FIND AND COLOR 5



					
butterfly	spider	beetle	fish	starfish	seahorse

If the butterfly is the first animal...

- 1) Which animal is fourth? _____
- 2) What place is the starfish in? _____
- 3) What place is the spider in? _____
- 4) Which animal is 3rd? _____
- 5) Which animal is last? _____
- 6) Color the second animal red.
- 7) Color the fourth animal orange.
- 8) Color the first animal yellow.
- 9) Color the 5th animal blue.
- 10) Color the third animal black.
- 11) Color the 6th animal green.

Q5. Write the place value of the underlined digit of the given numbers:-

<u>1</u> 54	<u>5</u> 0	44 <u>7</u>	<u>7</u>	<u>8</u> 43	<u>8</u> 00
3 <u>4</u> 5	_____	<u>8</u> 94	_____	3 <u>3</u> 4	_____
6 <u>7</u> 4	_____	<u>2</u> 53	_____	4 <u>4</u> 6	_____
4 <u>5</u> 1	_____	<u>3</u> 76	_____	<u>6</u> 25	_____
8 <u>5</u> 5	_____	54 <u>2</u>	_____	<u>1</u> 68	_____
<u>3</u> 69	_____	1 <u>6</u> 4	_____	73 <u>8</u>	_____
<u>4</u> 09	_____	38 <u>9</u>	_____	7 <u>9</u> 9	_____
7 <u>0</u> 7	_____	<u>3</u> 28	_____	8 <u>4</u> 8	_____

Q6. BRAIN TEASER

110	809	436	999	429	545	677	500
390	981	541	234	123	632	549	899

Find the numbers from the grid given above:-

- (i) A number in which all the digits are same.
- (ii) A number that has 6 in the hundred's place.
- (iii) A number in which the digit in hundreds house and ones house is same.
- (iv) A number that comes between 109 and 111.

ACTIVITY-

FAMILY BIRTHDAYS



Record the birthdays of your family members in a scrap book. The birthday should be in ascending order of age (youngest numbers of the family to the eldest member of the family.) Also paste pictures of your family member.

Class II

SUBJECT : EVS

Worksheet 1

My Body

Rearrange the letters to find the name of the body parts

A rea.....

E gel.....

B ahnd.....

F yees.....

C oens.....

G daeh.....

D infegsr.....

H cnek.....

Fill in the blanks

Smell, taste, see, hear, feel

1. I can..... different shapes.
2. I cansweets.
3. I can..... hot milk.
4. I can..... sweet fragrance of flowers.
5. I can..... soft music.

Some parts in our body are in pairs. Write their names and draw their pictures.

.....

.....

.....

Worksheet -2

FAMILY

Q 1 Fill in the blanks

1. We shouldour elders.
2. A family has one set of parents.
3. We should help each other by.....the work.
4. A family has common
5. My sister is of my parents.
6. My mother`s family is my family.
7. My father`s brother is my
8. In a family ever member shares the work.

Q 2. Paste the picture of your mother and write 5 lines about your mother

.....

.....

.....

.....

.....

Q 1. What do you call these relatives:

- 1.Your mother`s mother.....
- 2.Your mother`s father.....
- 3.Your father`s mother.....
4. Your father`s father.....
5. Your mother`s sister.....
6. Your father`s sister.....

ACTIVITY

Make a 2D or 3D family tree using all possible waste material in the house cardboards, old plastic glass/plate used gift wraps etc. and paste/draw all the family members picture in it including grandparents, parents, uncle, aunts and cousins.

